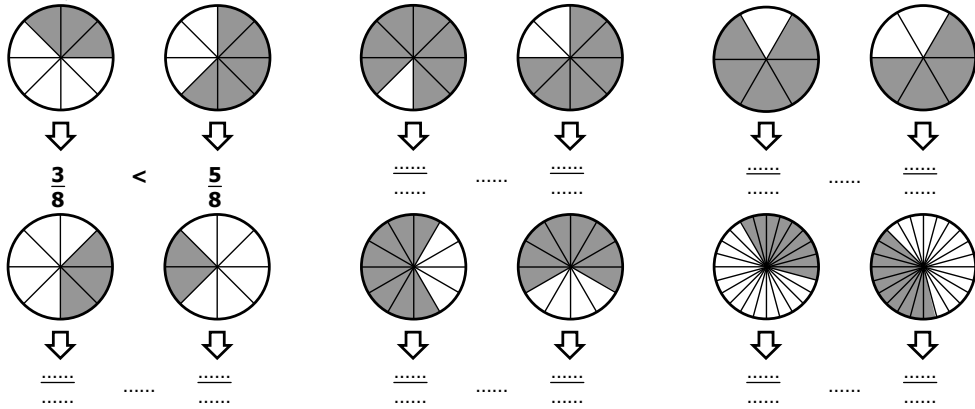


TN3 - Activité 3 :

a. Compare les deux fractions :

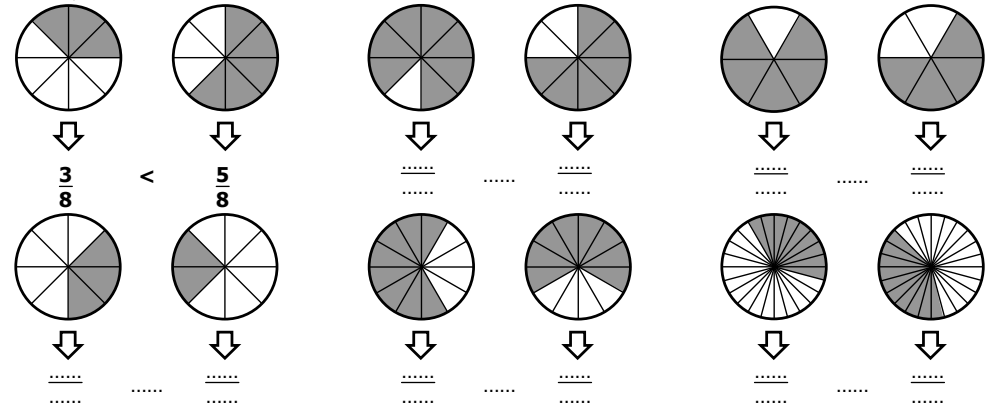


b. Compare les deux fractions :

$$\frac{1}{2} \dots \frac{3}{2} \quad \frac{13}{4} \dots \frac{11}{4} \quad \frac{9}{5} \dots \frac{12}{5} \quad \frac{14}{13} \dots \frac{12}{13} \quad \frac{4}{7} \dots \frac{9}{7} \quad \frac{7}{11} \dots \frac{6}{11}$$

TN3 - Activité 3 :

a. Compare les deux fractions :

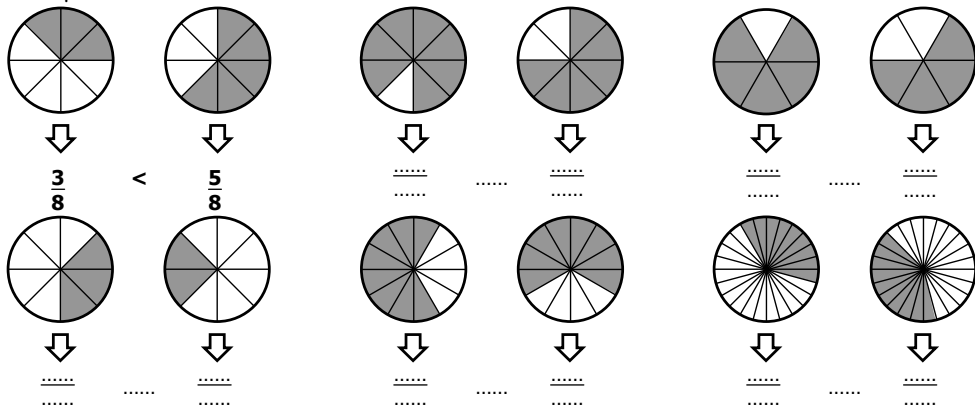


b. Compare les deux fractions :

$$\frac{1}{2} \dots \frac{3}{2} \quad \frac{13}{4} \dots \frac{11}{4} \quad \frac{9}{5} \dots \frac{12}{5} \quad \frac{14}{13} \dots \frac{12}{13} \quad \frac{4}{7} \dots \frac{9}{7} \quad \frac{7}{11} \dots \frac{6}{11}$$

TN3 - Activité 3 :

a. Compare les deux fractions :

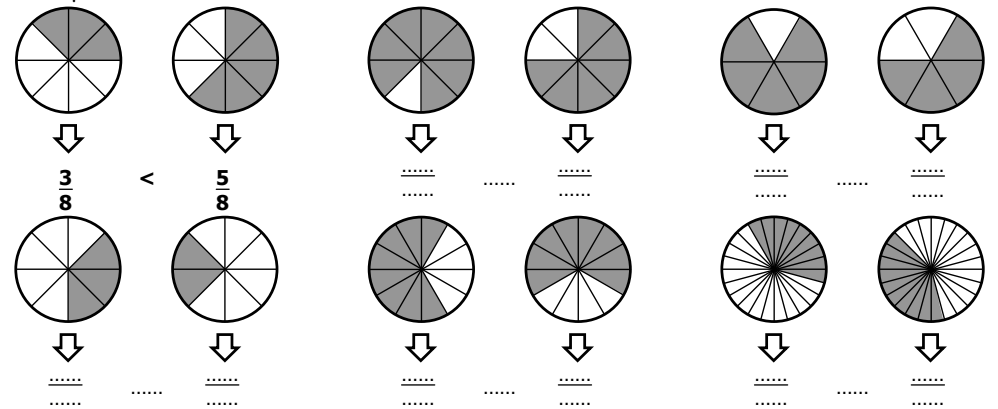


b. Compare les deux fractions :

$$\frac{1}{2} \dots \frac{3}{2} \quad \frac{13}{4} \dots \frac{11}{4} \quad \frac{9}{5} \dots \frac{12}{5} \quad \frac{14}{13} \dots \frac{12}{13} \quad \frac{4}{7} \dots \frac{9}{7} \quad \frac{7}{11} \dots \frac{6}{11}$$

TN3 - Activité 3 :

a. Compare les deux fractions :



b. Compare les deux fractions :

$$\frac{1}{2} \dots \frac{3}{2} \quad \frac{13}{4} \dots \frac{11}{4} \quad \frac{9}{5} \dots \frac{12}{5} \quad \frac{14}{13} \dots \frac{12}{13} \quad \frac{4}{7} \dots \frac{9}{7} \quad \frac{7}{11} \dots \frac{6}{11}$$