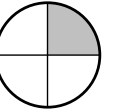
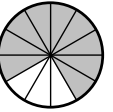
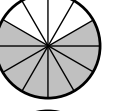
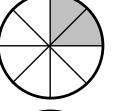
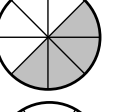
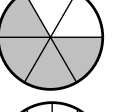
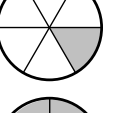
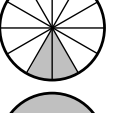
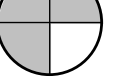

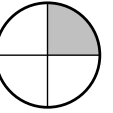
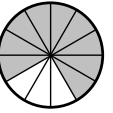
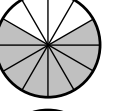
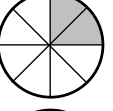
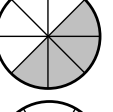
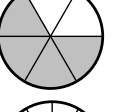
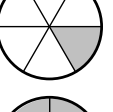
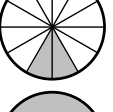
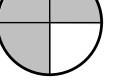



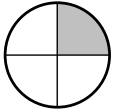

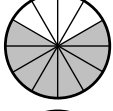
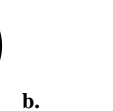
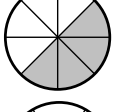
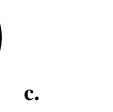
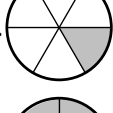
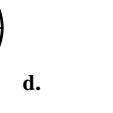
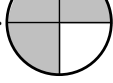
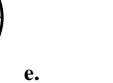
TN3 - Activité 2 : Relier par un trait les figures dont les surfaces coloriées sont superposables puis écrire l'égalité de fractions correspondante :

1.		•		a.	1.	$\frac{1}{4} = \frac{\dots}{\dots}$
2.		•		b.	2.	
3.		•		c.	3.	
4.		•		d.	4.	
5.		•		e.	5.	

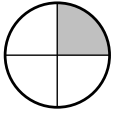

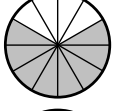
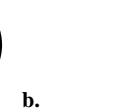
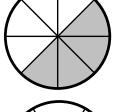
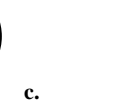
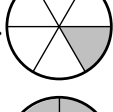
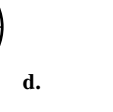
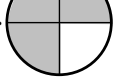
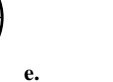
TN3 - Activité 2 : Relier par un trait les figures dont les surfaces coloriées sont superposables puis écrire l'égalité de fractions correspondante :

1.		•		a.	1.	$\frac{1}{4} = \frac{\dots}{\dots}$
2.		•		b.	2.	
3.		•		c.	3.	
4.		•		d.	4.	
5.		•		e.	5.	

TN3 - Activité 2 : Relier par un trait les figures dont les surfaces coloriées sont superposables puis écrire l'égalité de fractions correspondante :

1.		•		a.	1.	$\frac{1}{4} = \frac{\dots}{\dots}$
2.		•		b.	2.	
3.		•		c.	3.	
4.		•		d.	4.	
5.		•		e.	5.	

TN3 - Activité 2 : Relier par un trait les figures dont les surfaces coloriées sont superposables puis écrire l'égalité de fractions correspondante :

1.		•		a.	1.	$\frac{1}{4} = \frac{\dots}{\dots}$
2.		•		b.	2.	
3.		•		c.	3.	
4.		•		d.	4.	
5.		•		e.	5.	